



INDIAN SCHOOL SALALAH
SECOND TERM EXAMINATION, FEB - MARCH 2026



SCIENCE

Class: III

Date: 08-03-2026

Time: 2 Hours

Maximum Marks: 40

Roll No: (In numerals) Section:

Name of the Candidate:

Signature of the Invigilator:

Section A	
Section B	
Section C	
Section D	
Grand Total	

Signature of the Examiner with date:

Signature of the Checker with date :

General instructions:

i) This question paper consists of 7 pages with 16 questions in all.

ii) All the questions are compulsory

SECTION-A

Q1. Circle the correct option:-

(4x¹/₂=2)

- a. Which bird uses stones and pebbles to make its nest?
i. Eagle ii. Sparrow iii. Penguin iv. Crow
- b. A hot day means the weather is _____.
i. Sunny ii. Rainy iii. Cloudy iv. Windy
- c. We wear woollen clothes in _____.
i. Winter ii. Summer iii. Spring iv. Monsoon
- d. The shape of the Moon changes every _____.
i. Day ii. Month iii. Year iv. Week

Q2. Choose the correct answer from the bracket:-

(4x¹/₂=2)

- a. A bird uses its _____ (**wings/beak**) to catch and eat food.
- b. In _____ (**cold/hot**) places, water drops in the clouds come down as snow.
- c. Animals breathe in _____ (**carbon dioxide/oxygen**) present in the air.
- d. The holes on the moon are called _____ (**craters/ phases**).

Q3. Write true or false:-

(4x¹/₂=2)

- a. Birds have three types of feathers. _____
- b. Air contains dust and germs. _____
- c. The sun revolves around the moon. _____
- d. All objects give off light. _____

Q4. Match the following:-



(4x¹/₂=2)

<u>Column A</u>	<u>Column B</u>	<u>Match</u>	
1. Crane	a. Storm	<u>1</u>	
2. Fast blowing wind	b. Lightest planet	<u>2</u>	
3. Mercury	c. Wading bird	<u>3</u>	
4. Saturn	d. Smallest planet	<u>4</u>	

Q5.Circle the right picture:-

(4x½=2)



a. Which one is a source of natural light?



b. Which season comes after summer and before winter?



c. The moon goes around the:



d. Which weather has very strong winds?



SECTION- B

Q6.Answer in one word:-

(4x1=4)

a. A bird resting on a branch.

b. Loud and unpleasant sound.

c. Moving air.

d. An object moves around a planet.

Q7.Write two examples:-

(4x1=4)

a. Birds with webbed feet: _____, _____

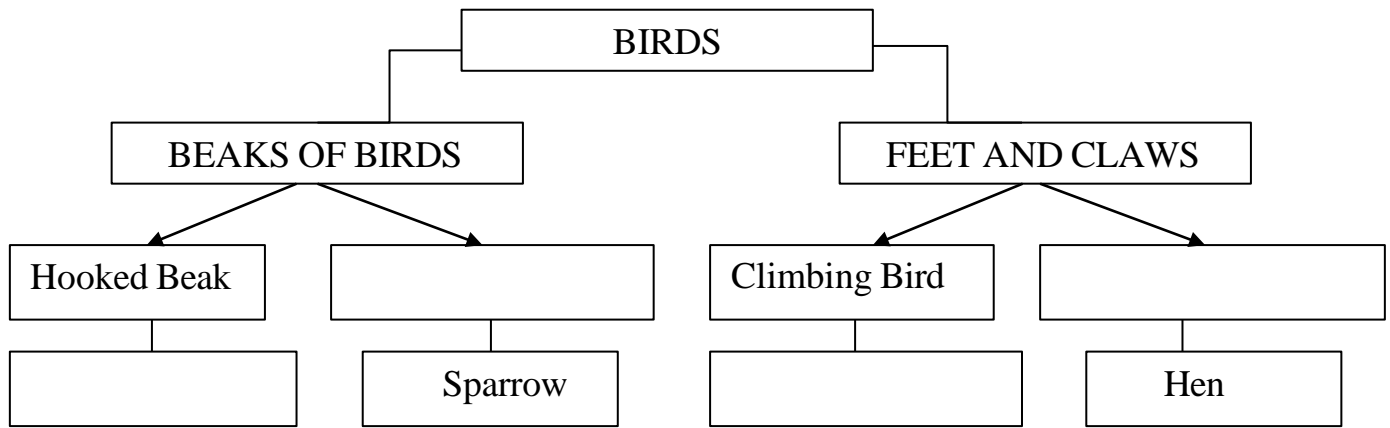
b. Objects that make sound: _____ , _____

c. Seasons: _____ , _____

d. Planets: _____ , _____

Q8. Complete the concept map:-


(4x½=2)



Q9. Observe the pictures and answer the questions:-

(4x½=2)

a. What kind of food does the bird eat?



Food: _____

b. Write any one material the bird used to make its nest.



Material: _____

c. What effect of force can you see on the clay?



d. Identify the effect of force in this given picture.



SECTION-C

Q10. Draw as direct:-

(2x $\frac{1}{2}$ =1)

Crescent	Half moon
-----------------	------------------

Q11. Define

(3x1=3)

a. Talons:-

b. Shadow:-

c. Water cycle:-

Q12. Differentiate between astronomers and astronauts:-

(2x1=2)

<u>Astronomers</u>	<u>Astronauts</u>

Q13. Short answer questions:-

(4x1=4)

a. Why do birds need to make a nest?

b. List any two uses of water.

c. What is weather?

d. What is satellite?

Q14. Answer in detail:-

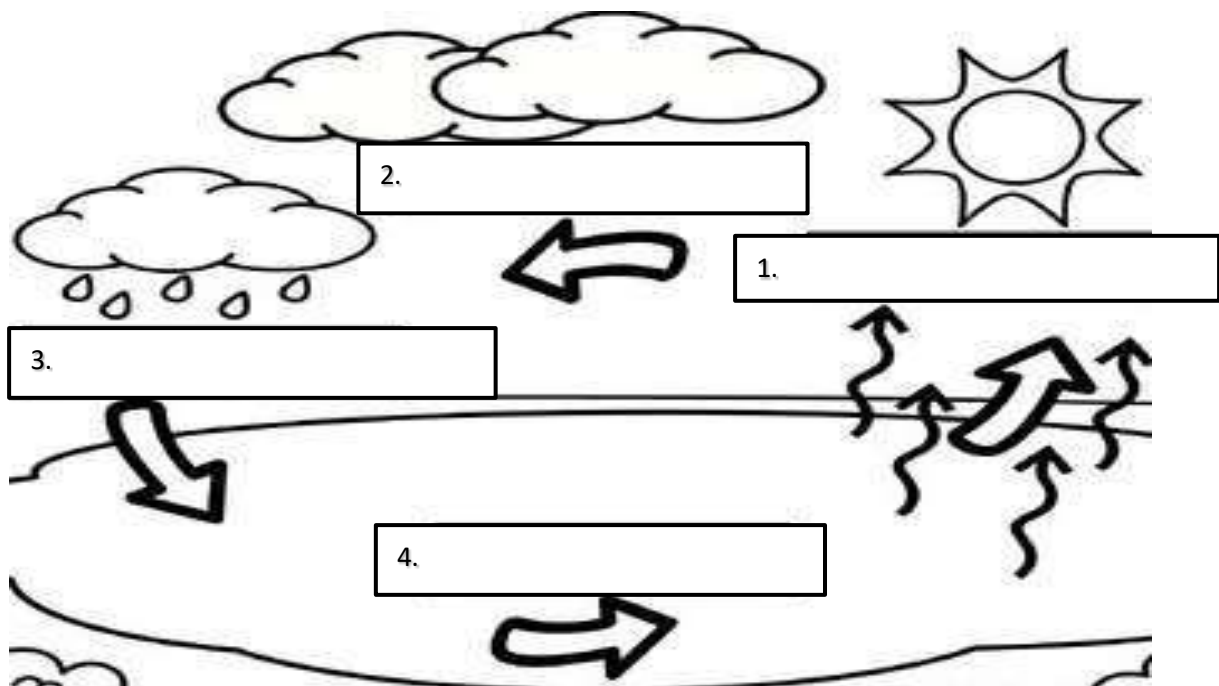
(2x2=4)

a. What is friction? Give two uses of friction in our daily life.

b. What is a constellation? Give two examples.

Q15. Label the process of water cycle:-

(4x½=2)



SECTION D

Q16. Think and answer :-

(2x1=2)

One day, Arjun visited a lake near his village. He saw a duck swimming happily in the water. Nearby, a woodpecker was tapping on a tree trunk. On another tree, a parrot was cracking nuts with its strong beak. High above, an eagle was flying with a small fish in its sharp claws. Arjun also noticed a weaver bird building a beautiful nest using grass and leaves.

Arjun wondered how each bird was able to live and find food in different ways.

a. Why does the duck have a flat beak instead of a strong, curved beak like a parrot?

b. If the lake near Arjun's village dries up, which one bird will be most affected and why?
