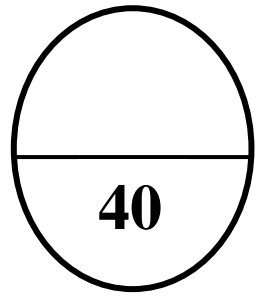


**INDIAN SCHOOL SALALAH**  
**SECOND TERM EXAMINATION MARCH -2018**  
**ENVIRONMENTAL SCIENCE [ EVS]**



CLASS :1V \_\_\_\_

MAX.MARKS:- 40

NAME :- \_\_\_\_\_

TIME:- 2 HOURS

ROLL NO:-\_\_\_\_\_

DATE :- \_\_ -03-2018

INVIGILATOR'S SIGN:- \_\_\_\_\_

NO OF PAGES: - 8

SCRUTINIZER'S SIGN :-\_\_\_\_\_

SUB TEACHER'S SIGN : \_\_\_\_\_

**1.Fill in the blanks**

**(3x $\frac{1}{2}$  =1 $\frac{1}{2}$ )**

1. A horse carriage drawn by a single horse is called a \_\_\_\_\_.
2. A slow moving river of ice is called \_\_\_\_\_.
3. Removing unwanted plants from the field is called \_\_\_\_\_.

**2. Choose the correct answer**

**(4x $\frac{1}{2}$ =2)**

1. \_\_\_\_\_ are rich in starch.  
( Pulses , Ground nuts , Cereals , Turmeric )
2. An imaginary line around which the earth rotates is called \_\_\_\_\_  
( axis , equator , ocean ,globe )
- 3.A place where the underground water comes out from the earth is called \_\_\_\_\_.  
( glacier , hot spring ,valleys , none of these )
4. Maharashtrians eat \_\_\_\_\_ on Ganesh Chaturthi.  
( modak ,cake ,halwa ,laddoo )

**3. Name the following**

**(4x $\frac{1}{2}$ =2)**

1. The change of water vapour to water on cooling .

\_\_\_\_\_

2. The chemical used for destroying harmful insects.

\_\_\_\_\_

3. The wheel-less cart used in polar region.

\_\_\_\_\_

4. An instrument used to find directions.

\_\_\_\_\_

**4. Write True or False**

**(4x $\frac{1}{2}$ =2)**

1. Sikkim is the state with the lowest population. \_\_\_\_\_

2. We should make animals work for long hours. \_\_\_\_\_

3. One –fourth of the earth is covered with water. \_\_\_\_\_

4. A book of map is called atlas. \_\_\_\_\_

**5. Write two examples of : -**

**(3x1=3)**

1. Snow fed rivers: - \_\_\_\_\_ , \_\_\_\_\_

2. Plateau: - \_\_\_\_\_ , \_\_\_\_\_

3. Junk food:- \_\_\_\_\_ , \_\_\_\_\_

**6. Encircle the odd one out**

**(3x $\frac{1}{2}$ =1 $\frac{1}{2}$ )**

1. Beverages - Tea , coffee , corn ,cocoa

2. Oceans - Pacific ,Atlantic ,Indian ,Stream

3. Food eaten in Bengal – Fish curry, Rajma- chawal , Rice ,Sandesh

**7. Complete the second pair**

**(4x1/2=2)**

1. Oil seed : Coconut :: Spice : \_\_\_\_\_
2. Sikkim : Gangtok :: Jharkhand : \_\_\_\_\_
3. Ship of the desert : Camel :: Beast of burden : \_\_\_\_\_
4. Smallest continent : Australia :: Largest continent : \_\_\_\_\_

**8. Who am I ?**

**(1x1/2=1/2)**

1. I am a four wheeled luxury cart drawn by more than one horse.  
\_\_\_\_\_
2. I am the purest form of water on the earth.  
\_\_\_\_\_
3. I grow crops in the field and water them regularly.  
\_\_\_\_\_

**9.Match column A with column B**

**(4x1/2=2)**

A	B	C
1.Tamil Nadu	a. Onges	
2.Id- ul-Fitr	b. Pongal	
3.Teej	c. Sewian	
4.Andaman	d. Ghewar	

**10.Define**

**(4x1=4)**

1. Equator :-  
\_\_\_\_\_  
\_\_\_\_\_

2. Community eating :-

---

---

---

3. Evaporation :-

---

---

---

4. Crops:-

---

---

---

**11. Write the differences between**

**(1x2=2)**

Globe	Map
1.	
2.	

**12. Answer the following in one sentence**

**(3x1=3)**

1. What are rainfed rivers?

---

---

2.What is a plain?

---

---

3.What is the shape of the earth?

---

---

**13.Give reason**

**(2x1=2)**

1.Northern plains are heavily populated.

---

---

---

2.Clothes take longer to dry on a cloudy day.

---

---

---

**14.Think and answer**

**(1x2=2)**

1. Mini is in a habit of wasting food. She piles up her plate with extra food , she cannot have on parties , functions and special occasions .What values do you think Mini needs to learn?

1. \_\_\_\_\_

---

2. \_\_\_\_\_

**15. Answer in 2 or 3 sentences**

**(3x2=6)**

1. How were horses used for transport in olden times?

---

---

---

---

2. What are the advantages of mid-day meal?

---

---

---

---


3. What factors help evaporation to take place faster?

1. \_\_\_\_\_
2. \_\_\_\_\_
3. \_\_\_\_\_
4. \_\_\_\_\_

**16. Identify the following**

**(3x1/2=1 1/2)**

1.



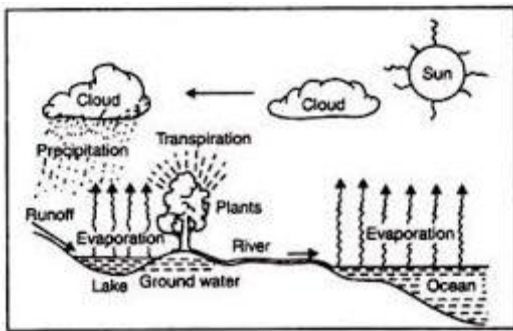
---

2



---

3.



---

**17. Change the underlined words to correct the statements** (2x<sup>1/2</sup>=1)

1. Loss of water through tiny pores on leaves is called precipitation .

---

2. Harvest festival was introduced by Guru Nanak Dev.

---

**18. On the given outline map of India label the following states (2x<sup>1/2</sup>=1)**

1. Rajasthan

2. Uttar Pradesh

